


Math Problem-Solving



Measurement:

Weight

Blackline Masters

www.kindergartenkindergarten.com



What objects can you find that weigh **more** than your water bottle?

What objects can you find that weigh **less** than your water bottle?



What objects can you find that weigh **more** than your water bottle?

What objects can you find that weigh **less** than your water bottle?



What objects can you find that weigh **more** than your water bottle?

What objects can you find that weigh **less** than your water bottle?



What objects can you find that weigh **more** than your water bottle?

What objects can you find that weigh **less** than your water bottle?



What objects can you find that weigh **more** than your water bottle?

What objects can you find that weigh **less** than your water bottle?



What objects can you find that weigh **more** than your water bottle?

What objects can you find that weigh **less** than your water bottle?



What objects can you find that weigh **more** than your water bottle?

What objects can you find that weigh **less** than your water bottle?



What objects can you find that weigh **more** than your water bottle?

What objects can you find that weigh **less** than your water bottle?

Name _____

Which Weighs More?



or



or



or



or



or









or




Which object weighs the most?

Balancing Cubes!

How many cubes does it take to balance...

	_____ cubes
	_____ cubes
	_____ cubes
	_____ cubes
	_____ cubes
	_____ cubes





Which object weighs the most?




What objects can you find that weigh the same as an eraser?


heavy

light







How does a balance work?




How does a balance work?




How does a balance work?




How does a balance work?




How does a balance work?




How does a balance work?



How does a balance work?



How does a balance work?



It takes 8 cubes to balance my book and pencil together.

I know it takes 5 cubes to balance my book by itself.

How many cubes does it take to balance the pencil by itself?